

Eredu Linealak eta Ebazpide Grafikoa. Soluzioak

Eredu Linealak

1. Marmeladen problema.

Erabaki-aldagaiak:

x_i = ekoitziko den i motako marmelada kg kopurua, $i = 1$ (sagarra), 2 (arana), 3 (mertxika).

y_i = ekoitziko den bi zapozeko i marmelada kg kopurua, $i = 1$ (sagar+aran), 2 (sagar+mertxika).

Eredu lineala:

$$\max z = (2 - 0.4)x_1 + (2 - 0.6)x_2 + (2 - 0.8)x_3 + (2.5 - 0.4)\frac{1}{2}(y_1 + y_2) + (2.5 - 0.6)\frac{1}{2}y_1 + (2.5 - 0.8)\frac{1}{2}y_2$$

hauen mende

$$x_1 \geq 175$$

$$x_2 \geq 160$$

$$x_3 \geq 150$$

$$x_1 + \frac{1}{2}y_1 + \frac{1}{2}y_2 \leq 1000$$

$$x_2 + \frac{1}{2}y_1 \leq 600$$

$$x_3 + \frac{1}{2}y_2 \leq 800$$

$$x_1, x_2, x_3, y_1, y_2 \geq 0$$

2. Mazedonien problema.

Erabaki-aldagaiak:

$x_i = i$ frutaren kantitatea kg bat mazedonia normalean, $i = 1$ (gerezia), 2 (sandia), 3 (mangoa), 4 (laranja), 5 (meloia), 6 (banana).

$y_i = i$ frutaren kantitatea kaloriatan baxua den kg bat mazedonian, $i = 1$ (gerezia), 2 (sandia), 3 (mangoa), 4 (laranja), 5 (meloia), 6 (banana).

Eredu lineala:

$$\min z = 7(x_1 + y_1) + 0.9(x_2 + y_2) + 4(x_3 + y_3) + 1.6(x_4 + y_4) + 1.4(x_5 + y_5) + 1.5(x_6 + y_6)$$

hauen mende

$$250x_1 + 100x_2 + 150x_3 + 400x_4 + 140x_5 + 90x_6 \geq 150$$

$$200x_1 + 90x_2 + 220x_3 + 200x_4 + 160x_5 + 280x_6 \geq 200$$

$$120x_1 + 60x_2 + 50x_3 + 550x_4 + 300x_5 + 100x_6 \geq 200$$

$$700y_1 + 300y_2 + 580y_3 + 490y_4 + 300y_5 + 900y_6 \leq 400$$

$$200y_1 + 90y_2 + 220y_3 + 200y_4 + 160y_5 + 280y_6 \geq 100$$

$$120y_1 + 60y_2 + 50y_3 + 550y_4 + 300y_5 + 100y_6 \geq 250$$

$$x_1 + x_2 \geq 0.1(x_1 + x_2 + x_3 + x_4 + x_5 + x_6)$$

$$y_1 + y_2 \geq 0.1(y_1 + y_2 + y_3 + y_4 + y_5 + y_6)$$

$$x_3 + x_4 \geq 0.3(x_1 + x_2 + x_3 + x_4 + x_5 + x_6)$$

$$y_3 + y_4 \geq 0.3(y_1 + y_2 + y_3 + y_4 + y_5 + y_6)$$

$$x_5 + x_6 \geq 0.2(x_1 + x_2 + x_3 + x_4 + x_5 + x_6)$$

$$y_5 + y_6 \geq 0.2(y_1 + y_2 + y_3 + y_4 + y_5 + y_6)$$

$$x_1 + x_2 + x_3 + x_4 + x_5 + x_6 = 1$$

$$y_1 + y_2 + y_3 + y_4 + y_5 + y_6 = 1$$

$$x_i, y_i \geq 0, \quad i = 1, 2, 3, 4, 5, 6$$

3. Udalekuen problema.

Erabaki-aldagaiak:

x_{ij} = ama-hizkuntza i duen zenbat neska joango den j udalekura,

$i = e$ (euskara), g (gaztelera), $j = 1, 2$.

y_{ij} = ama-hizkuntza i duen zenbat mutil joango den j udalekura,

$i = e$ (euskara), g (gaztelera), $j = 1, 2$.

Eredu lineala:

$$\min z = 8x_{e1} + 8y_{e1} + 8x_{g1} + 8y_{g1} + 26x_{e2} + 26y_{e2} + 26x_{g2} + 26y_{g2}$$

hauen mende

$$x_{e1} + x_{e2} = 650$$

$$y_{e1} + y_{e2} = 600$$

$$x_{g1} + x_{g2} = 475$$

$$y_{g1} + y_{g2} = 475$$

$$x_{e1} + y_{e1} + x_{g1} + y_{g1} \leq 800$$

$$x_{e1} + y_{e1} \geq 0.5(x_{e1} + y_{e1} + x_{g1} + y_{g1})$$

$$x_{e2} + y_{e2} \geq 0.5(x_{e2} + y_{e2} + x_{g2} + y_{g2})$$

$$x_{e1} + x_{g1} \geq 0.5(x_{e1} + y_{e1} + x_{g1} + y_{g1})$$

$$x_{e2} + x_{g2} \geq 0.5(x_{e2} + y_{e2} + x_{g2} + y_{g2})$$

$$x_{e1}, x_{e2}, x_{g1}, x_{g2} \geq 0 \quad \text{eta osoak}$$

$$y_{e1}, y_{e2}, y_{g1}, y_{g2} \geq 0 \quad \text{eta osoak}$$

4. Lan-jantzien problema.

Erabaki-aldagaiak:

x_{ij} = i hilabetean ekoitziko den j motako lan-jantzi kopurua, $i = 1, \dots, 6$, $j = 1$ (ehun berriaz egindakoa), 2 (birziklatutako ehunezkoa).

y_{ij} = i hilabetean biltegiratuko den j motako lan-jantzi kopurua, $i = 1, \dots, 5$, $j = 1$ (ehun berriaz egindakoa), 2 (birziklatutako ehunezkoa).

Eredu lineala:

$$\min z = 70(x_{11} + x_{21} + x_{31} + x_{41} + x_{51} + x_{61}) + 60(x_{12} + x_{22} + x_{32} + x_{42} + x_{52} + x_{62}) + y_{11} + y_{21} + y_{31} + y_{41} + y_{51} + y_{12} + y_{22} + y_{32} + y_{42} + y_{52}$$

hauen mende

$$x_{11} = 100 + y_{11}, \quad x_{12} = 100 + y_{12}$$

$$x_{21} + y_{11} = 300 + y_{21}, \quad x_{22} + y_{12} = 150 + y_{22}$$

$$x_{31} + y_{21} = 500 + y_{31}, \quad x_{32} + y_{22} = 300 + y_{32}$$

$$x_{41} + y_{31} = 600 + y_{41}, \quad x_{42} + y_{32} = 200 + y_{42}$$

$$x_{51} + y_{41} = 200 + y_{51}, \quad x_{52} + y_{42} = 100 + y_{52}$$

$$x_{61} + y_{51} = 450, \quad x_{62} + y_{52} = 300$$

$$x_{11} \leq 400, \quad x_{12} \leq 200$$

$$x_{21} \leq 400, \quad x_{22} \leq 200$$

$$x_{31} \leq 400, \quad x_{32} \leq 200$$

$$x_{41} \leq 400, \quad x_{42} \leq 200$$

$$x_{51} \leq 400, \quad x_{52} \leq 200$$

$$x_{61} \leq 400, \quad x_{62} \leq 200$$

$$x_{ij} \geq 0 \text{ eta osoak, } i = 1, \dots, 6, j = 1, 2$$

$$y_{ij} \geq 0 \text{ eta osoak, } i = 1, \dots, 5, j = 1, 2$$

5. Lehiaketaren problema.

Erabaki-aldagaiak:

$$x_i = \begin{cases} 1 & \text{baldin } i \text{ haurra taldeko partaide izango bada, } i = 1, \dots, 20. \\ 0 & \text{kontrako kasuan.} \end{cases}$$

Eredu lineala:

$$\begin{aligned} \min z = & x_1 + x_2 + x_3 + x_4 + x_5 + x_6 + x_7 + x_8 + x_9 + x_{10} + \\ & + x_{11} + x_{12} + x_{13} + x_{14} + x_{15} + x_{16} + x_{17} + x_{18} + x_{19} + x_{20} \\ & \text{hauen mende} \end{aligned}$$

$$x_2 + x_6 + x_7 + x_{12} + x_{19} \geq 1$$

$$x_5 + x_{13} + x_{14} \geq 1$$

$$x_9 + x_{15} + x_{18} \geq 1$$

$$x_1 + x_4 + x_9 + x_{10} + x_{20} \geq 1$$

$$x_{13} + x_{17} \geq 1$$

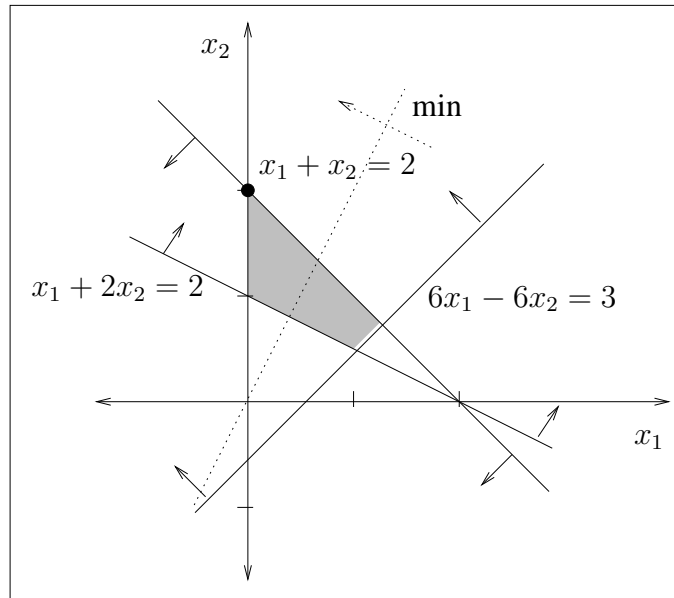
$$x_3 + x_8 + x_{11} + x_{12} + x_{16} \geq 1$$

$$x_1 + x_2 + \dots + x_{20} \geq 3$$

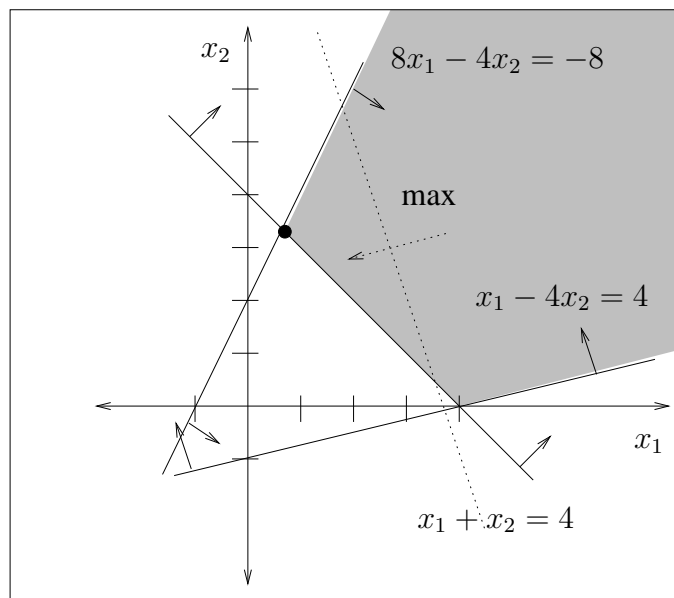
$$x_i = 0, 1, \quad i = 1, \dots, 20$$

Ebazpide Grafikoa

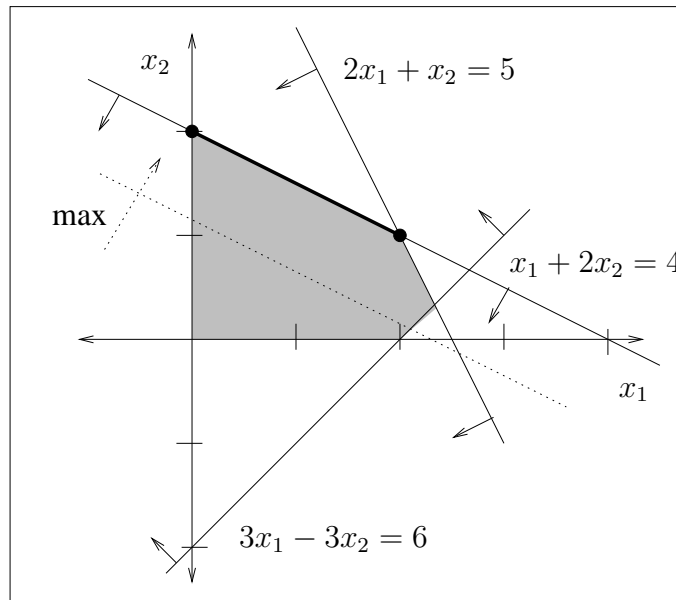
1. Soluzio optimo bakarra: $x_1^* = 0$, $x_2^* = 2$, $z^* = -2$.



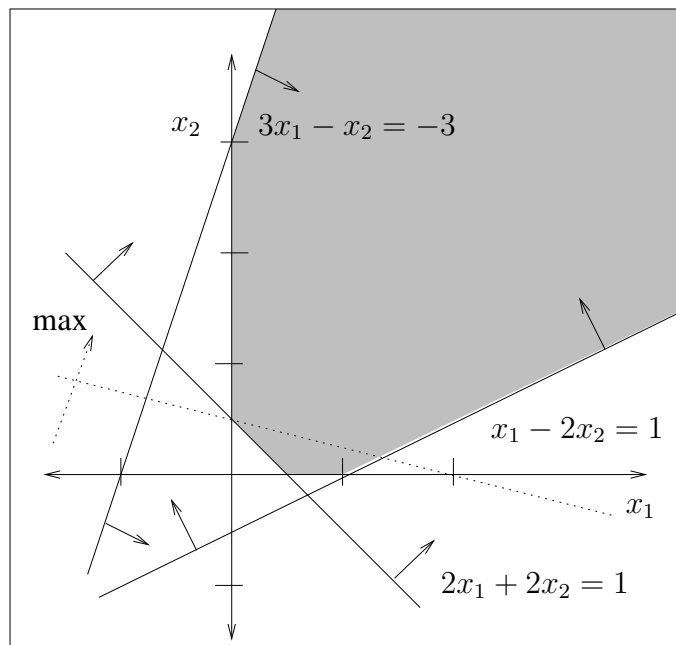
2. Soluzio optimo bakarra: $x_1^* = \frac{2}{3}$, $x_2^* = \frac{10}{3}$, $z^* = -\frac{32}{3}$.



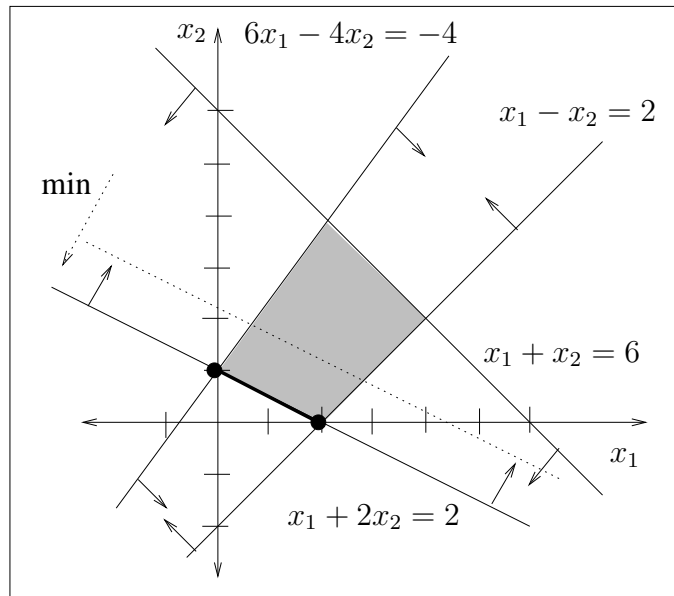
3. Soluzio optimo anizkoitza: $x_1^* = 0, x_2^* = 2$ mutur-puntua, $x_1^* = 2, x_2^* = 1$ mutur-puntua, eta bi mutur-puntuak lotzen dituen segmentuan dauden infinitu soluzioak optimo dira. $z^* = 8$.



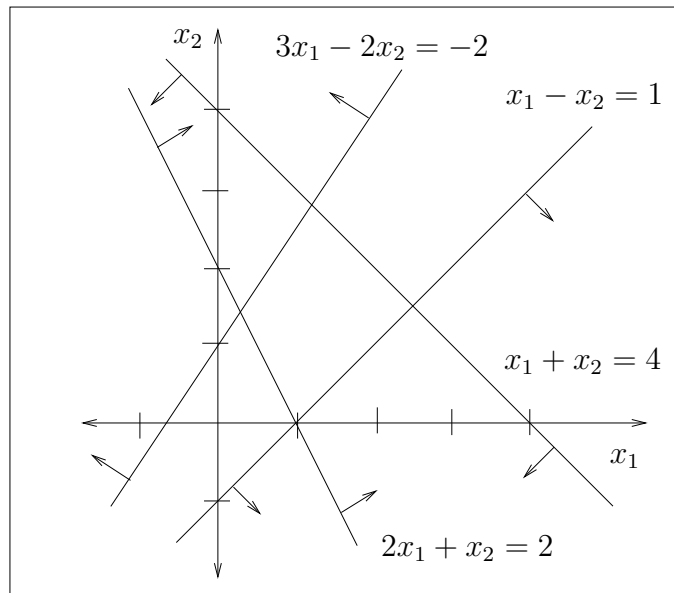
4. Soluzio bornegabea.



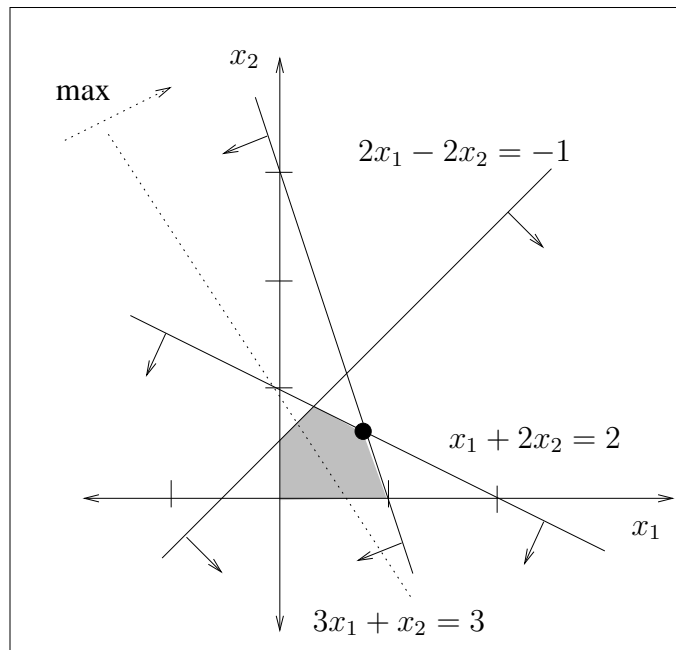
5. Soluzio optimo anizkoitza: $x_1^* = 0, x_2^* = 1$ mutur-puntua, $x_1^* = 2, x_2^* = 0$ mutur-puntua, eta bi mutur-puntuak lotzen dituen segmentuan dauden infinitu soluzioak optimo dira. $z^* = 2$.



6. Problema bideraezina.



7. Soluzio optimo bakarra: $x_1^* = \frac{4}{5}$, $x_2^* = \frac{3}{5}$. $z^* = \frac{36}{5}$.



8. Soluzio bornegabea.

