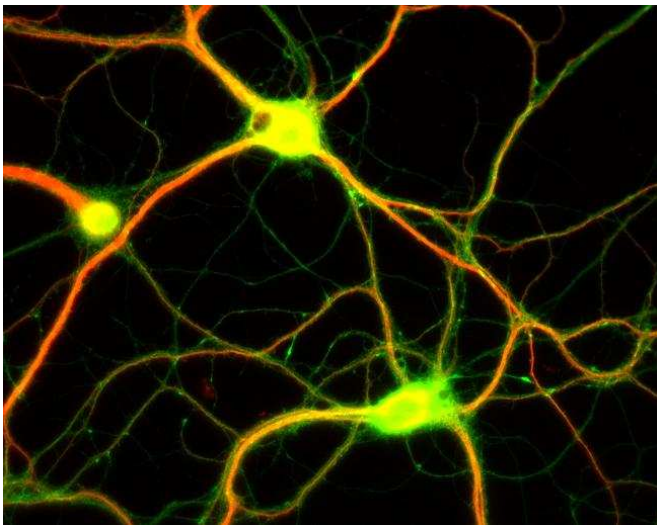




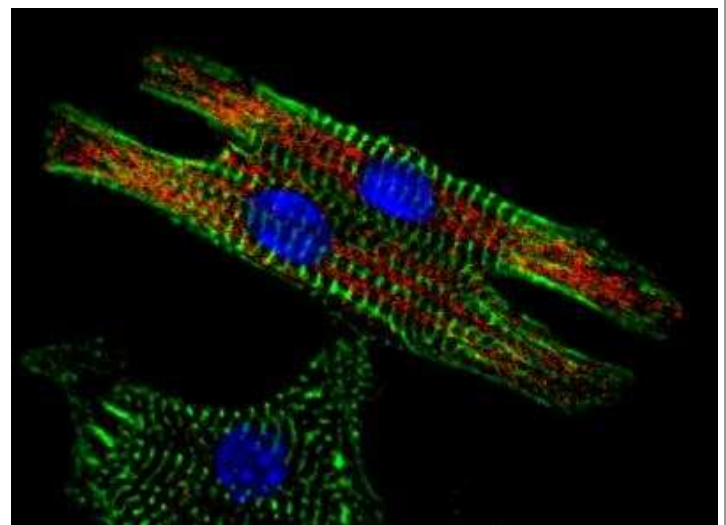
✓ Identifika ezazu argazki bakoitzean ikusten den zelula mota. Adierazi ere zein den erabilitako mikroskopia mota. (**MO**: Mikroskopia optikoa; **FLUO**: Fluoreszentziako mikroskopia; **TEM**: Transmisiozko mikroskopia elektronikoa, **SEM**: Ekorketazko mikroskopia elektronikoa)

Mikroskopia

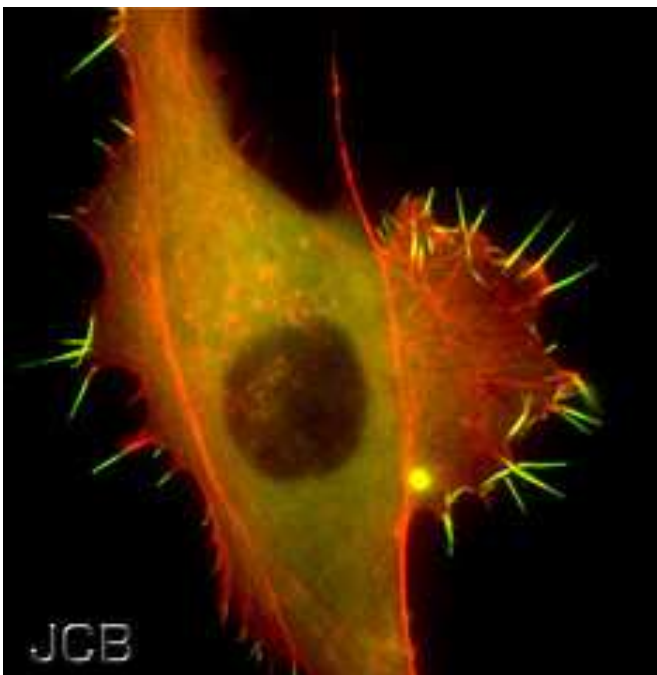
▪ Fibroblastoa		A	B	C	D
▪ Linfozitoak (odol-zelula mota bat)		A	B	C	D
▪ Muskulu-zelula		A	B	C	D
▪ Nerbio zelulak		A	B	C	D



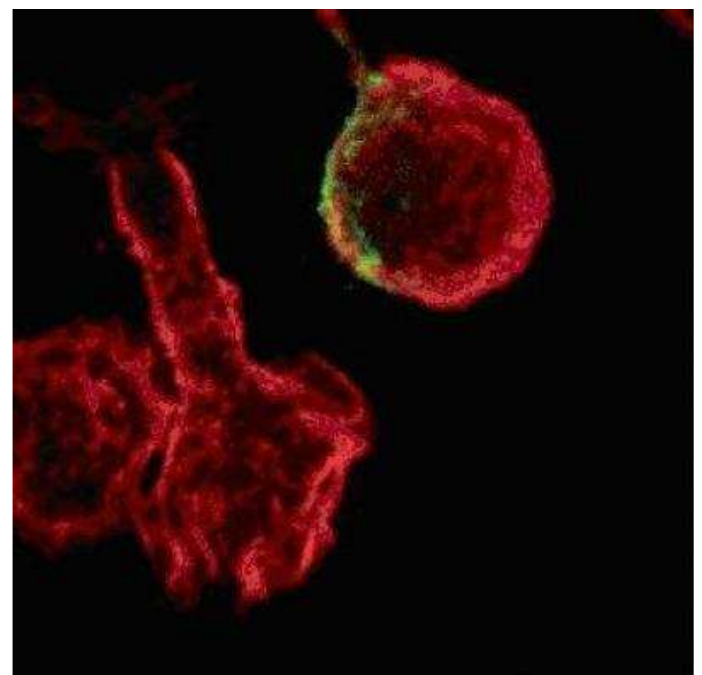
A) CIL:8735 Dieter Brandner, Ginger Withers



B) Volker Brinkmann/Wikimedia Commons



C) Reference: Nemethova, Auinger and Small (2008) J. Cell Biol. 180:1233-1244.



D) Credit Hygiene Institute, Heidelberg University Hospital