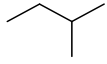


2. Gaia. Ebaluazio Azterketa Alkanoak

1. Izenda edo formula itzazu hurrengo alkano linealak eta ziklikoak.



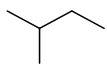
2-metilbutano



metilpropano



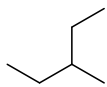
butano



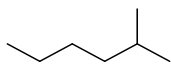
2-metilbutano



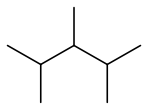
hexano



3-metilpentano



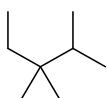
2-metilhexano



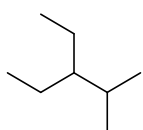
2,3,4-trimetilpentano



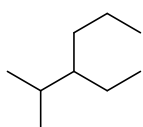
2,2-dimetilpropano



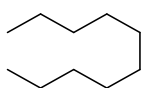
2,3,3-trimetilpentano



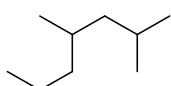
3-etil-2-metilpentano



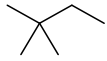
3-etil-2-metilhexano



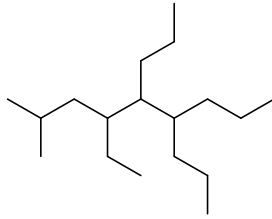
dekano



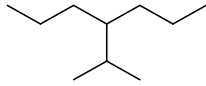
2,4-dimetilheptano



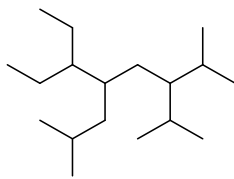
2,2-dimetilbutano



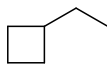
4-etil-2-metil-5,6-dipropilnonano



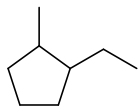
4-(propan-2-il)heptano



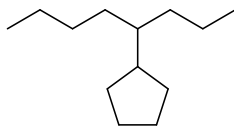
6-etil-2-metil-5-(2-metilpropil)-3-(propan-2-il)oktano



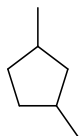
2-etilziklobutano



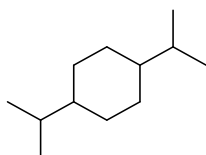
1-etil-2-metilziklopentano



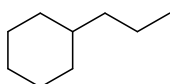
oktan-4-ilziklopentano



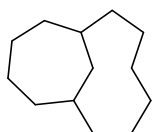
1,3-dimetilziklopentano



1,4-di(propan-2-il)ziklohexano



butilziklohexano



bicyclo[6.4.1]tridekano



espiro[4.4]nonano